

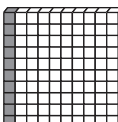



# La fraction et le nombre décimal

1 Associe chaque fraction à sa représentation.

a)  $\frac{5}{10}$       ●      ●      

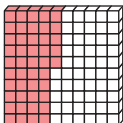
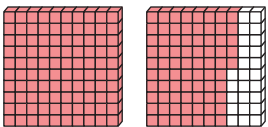
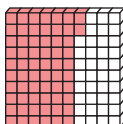
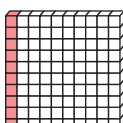
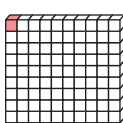
b)  $\frac{5}{100}$       ●      ●      

c)  $\frac{1}{100}$       ●      ●      

d)  $\frac{1}{10}$       ●      ●      

*Note: Red lines connect a) to the 5th grid, b) to the 1st grid, c) to the 4th grid, and d) to the 2nd grid.*

2 Dans chaque cas, représente le nombre décimal et écris la fraction correspondante.

	Nombre décimal	Représentation	Fraction
a)	0,45		$\frac{45}{100}$
b)	1,75		$1 \frac{75}{100}$
c)	0,62		$\frac{62}{100}$
d)	0,1		$\frac{1}{10}$ ou $\frac{10}{100}$
e)	0,01		$\frac{1}{100}$