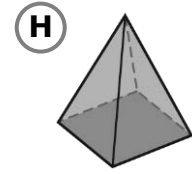
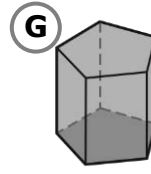
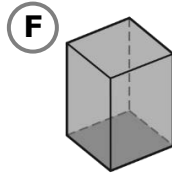
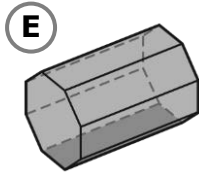
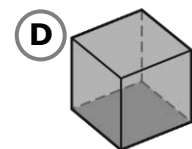
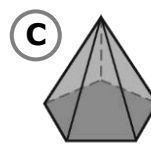
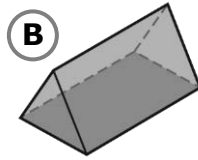
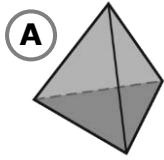
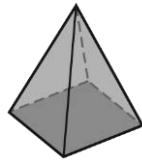


# Les solides et leur développement

**1** Encerle les prismes et fais un **X** sur les pyramides.



**2** Complète les énoncés.

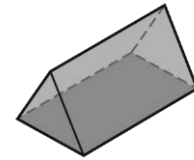


a) Cette \_\_\_\_\_ à base

\_\_\_\_\_ possède

faces,  sommets

et  arêtes.



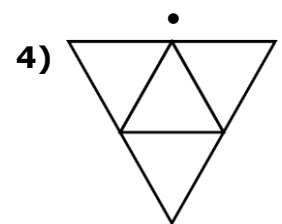
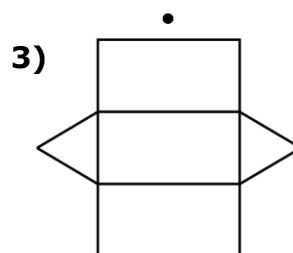
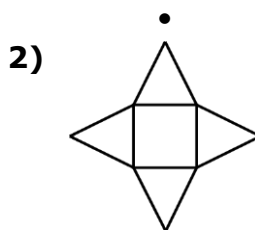
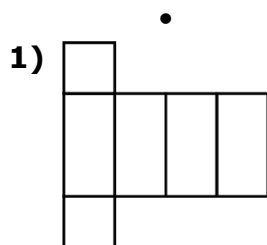
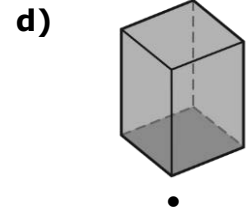
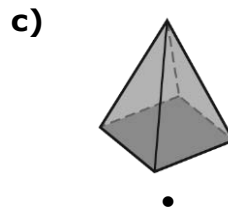
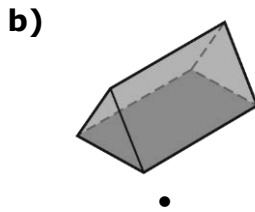
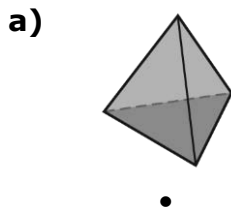
b) Ce \_\_\_\_\_ à base

\_\_\_\_\_ possède

faces,  sommets

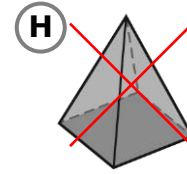
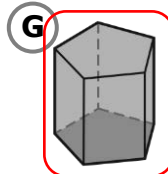
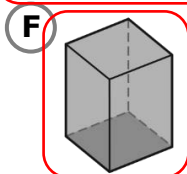
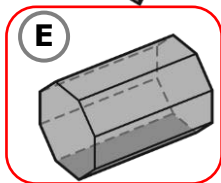
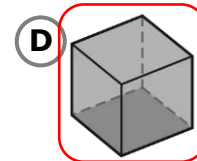
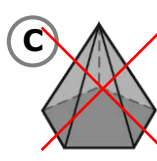
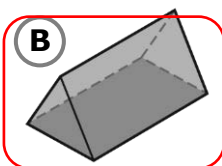
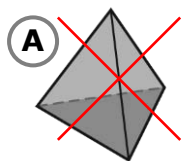
et  arêtes.

**3** Relie chaque solide à son développement.



# Les solides et leur développement

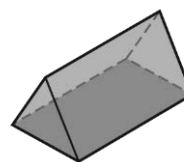
**1** Encerle les prismes et fais un **X** sur les pyramides.



**2** Complète les énoncés.



a) Cette pyramide à base carrée possède  faces,  sommets et  arêtes.



b) Ce prisme à base triangulaire possède  faces,  sommets et  arêtes.

**3** Relie chaque solide à son développement.

